

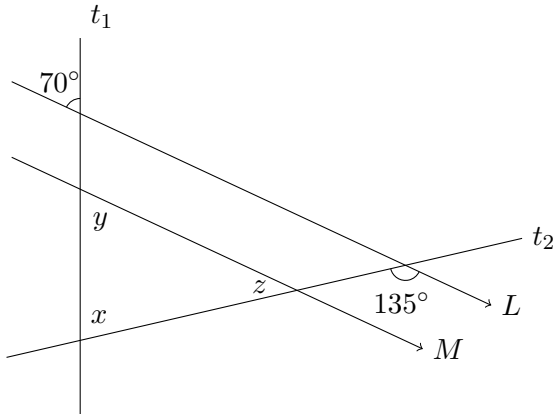
Math 123
 Spring 2023
 Dr. Lily Yen

Assignment 3

Show all your work


Name: _____
 Number: _____
 Signature: _____
 Score: ____/8

Problem 1: Lines L and M are parallel with transversals t_1 and t_2 . Given two angles 70° and 135° as shown in the diagram, find the interior angles $\angle x$, $\angle y$, and $\angle z$ in the small triangle.



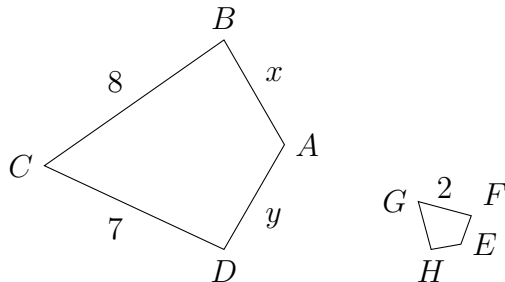
Score: ____/3

Problem 2: Find the smaller angle formed by the hour hand and the minute hand at five o'clock on a twelve-hour analogue clock. Show your work.



Score: ____/2

Problem 3: Given two similar quadrilaterals: quadrilateral $ABCD$ is similar to quadrilateral $EFGH$, find x and y given that $\overline{FE} = 1/2$, and $\overline{HE} = 3/5$.



Score: ____/3